

Name: _____

Date: _____







Music Mid-Year Assessment

(Worth 50 points)

1. What Instrument do you play? _____
2. What materials do you need to play & take care of your instrument? (list at least 3)
 - a. _____
 - b. _____
 - c. _____

Not your instrument
3. What clef do you use to read music for your instrument?
4. Please draw the clef for your instrument:

Music Theory: (please correctly name each musical symbol) (# 5-15)

5.  _____
6. How many lines & spaces does a staff have? _____ lines _____ spaces
7.  _____ = _____ beats/counts
8.  _____ = _____ beats/counts
9.  _____ = _____ beats/counts
10.  _____ = _____ beats/counts
11.  _____ = _____ beats/counts

12.  _____ = _____ beats/counts

13.  _____ = _____ beats/counts


14.  _____ = _____ beats/counts

15.  _____ = _____ beats/counts


16. A rest means _____.

17. *p* stands for the Italian word _____ which means _____.

18. *f* stands for the Italian word _____ which means _____.


19.  is a _____ which means to _____.

20. Label underneath if it is a line or space note:




21. Write our musical alphabet: _____.

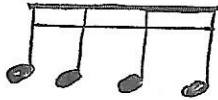
22. Label the spaces and the lines in the staff of the clef you play. (worth 9 pts) *Write Letter Names*



23. How many measures are below? _____ Draw a whole note in measure 6.



Bonus: (worth 20 points)

1.  _____

2. What is a composer? _____

3. Name 3 composers:

a.

b.

c.

4. What is Amy? _____ (not teacher)

5. Arpeggio means _____

6. Pentascale means _____

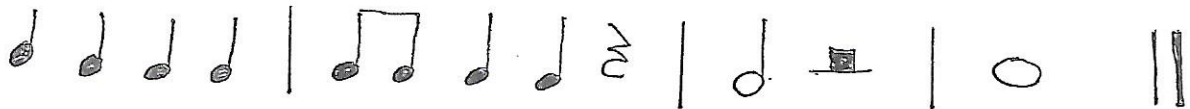
7. $\frac{4}{4}$ _____

8. Top number in $\frac{7}{4}$ means _____

9. Bottom number in $\frac{7}{4}$ means _____

10. Write in the counting of the rhythm below: *Numbers or Tais & Ti's, etc*

a.

$\frac{4}{4}$ 

b.

$\frac{3}{4}$ 

Double Bonus (Worth 20 points):

11.

b



12.

#



13.

♯



14.

♮



15.

♭



16. Write the Solfège five note scale.

